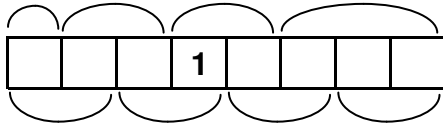


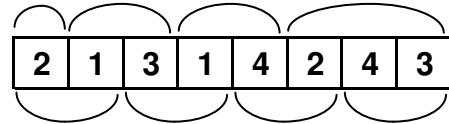
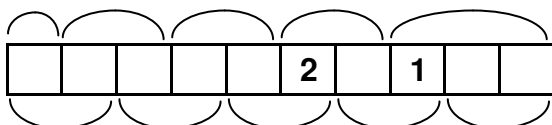
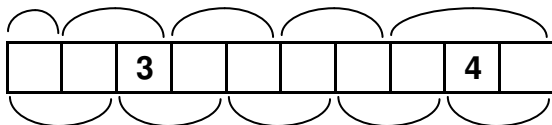
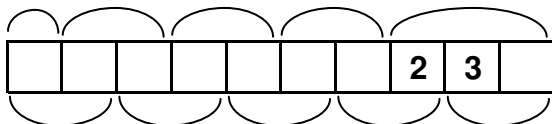
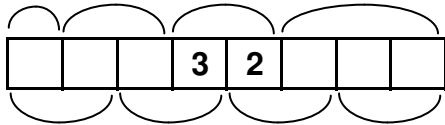
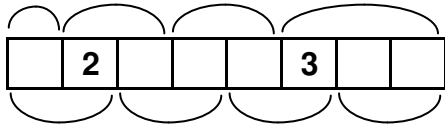
Növekvő sorozatok

Írjon számjegyeket az üres mezőkbe, úgy, hogy 1-4-ig 5-ig illetve 9-ig minden számjegy kétszer szerepeljen, és azonos számjegy ne legyen egymás mellett. Az ábra alá és fölé rajzolt félkörívek azt jelölik, hogy a számjegyek hogyan alkotnak számokat. Az így kapott számoknak mindkét felosztás szerint balról jobbra növekedniük kell. Például a minta ábrában a felső felosztás szerint: $2 < 13 < 14 < 243$, míg az alsó szerint $21 < 31 < 42 < 43$.

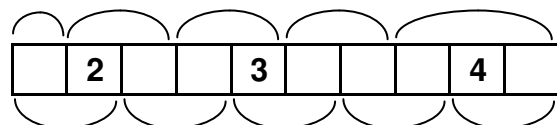
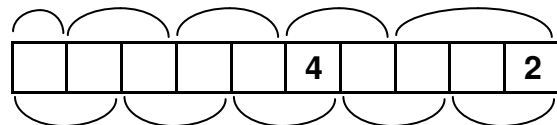
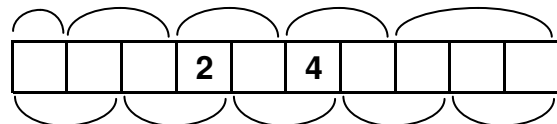
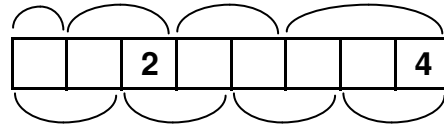
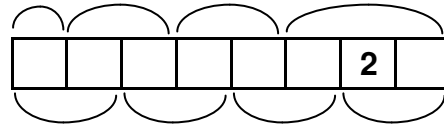
Minta



660-669. rejtvényeket
Slenker Gyula
készítette

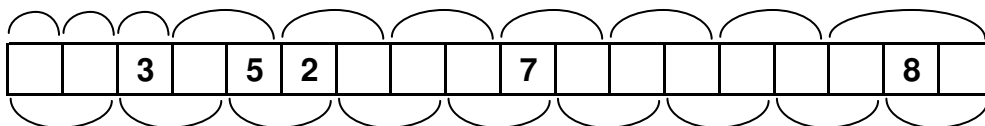


670-674. rejtvényeket
Németh Zoltán
készítette



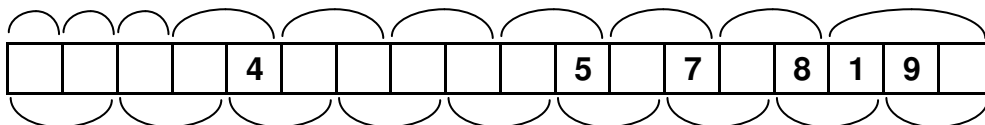
nr.668

●●●●●●○○○



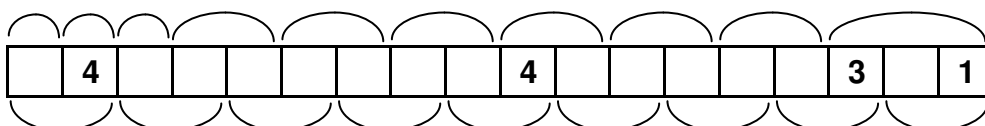
nr.669

●●●●●●○○○



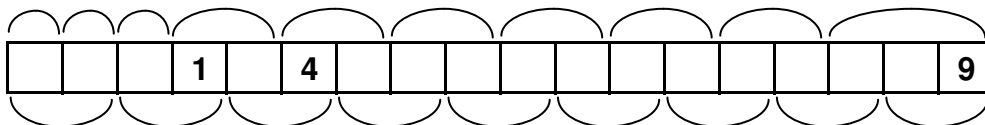
nr.670

●●●●●●○○○



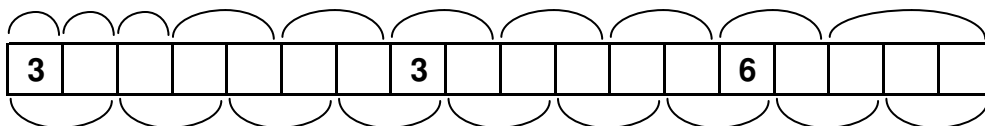
nr.671

●●●●●●○○○



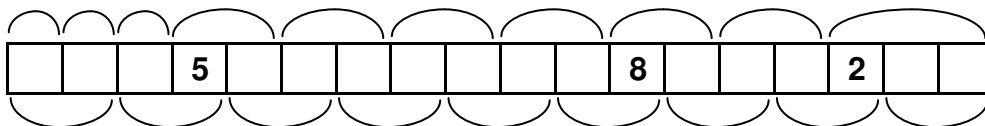
nr.672

●●●●●●○○○



nr.673

●●●●●●○○○



nr.674

●●●●●●○○○

